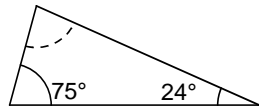
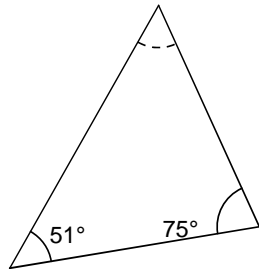


Troba el valor de l'angle desconegut.

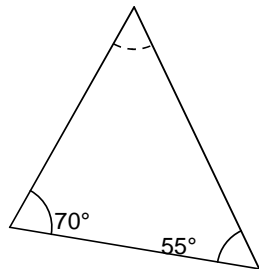
1)



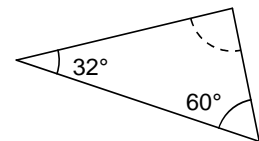
2)



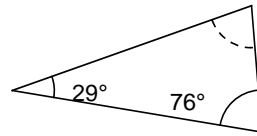
3)



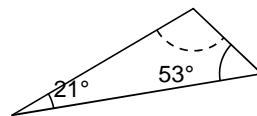
4)



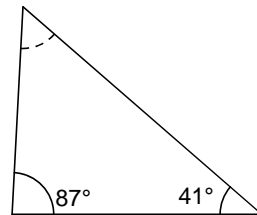
5)



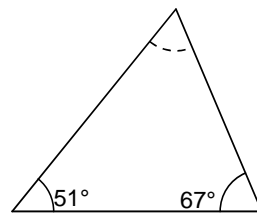
6)



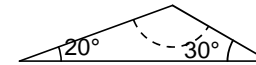
7)



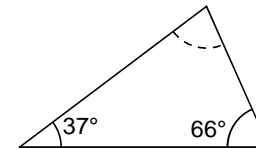
8)



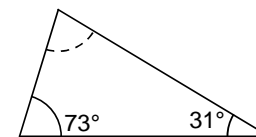
9)



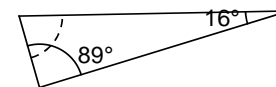
10)



11)

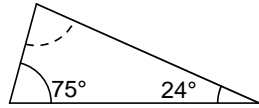


12)



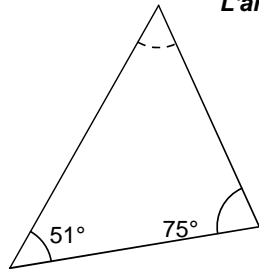
Troba el valor de l'angle desconegut.

1)



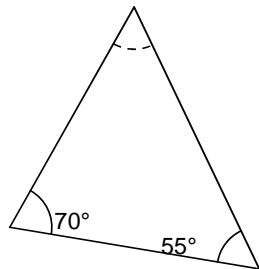
L'angle desconegut mesura  $81^\circ$

2)



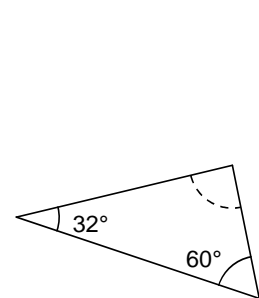
L'angle desconegut mesura  $54^\circ$

3)



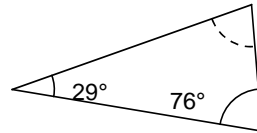
L'angle desconegut mesura  $55^\circ$

4)



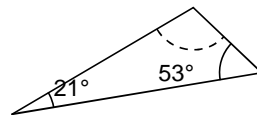
L'angle desconegut mesura  $88^\circ$

5)



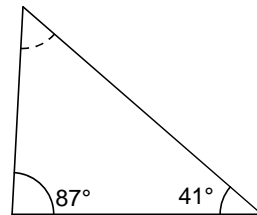
L'angle desconegut mesura  $75^\circ$

6)



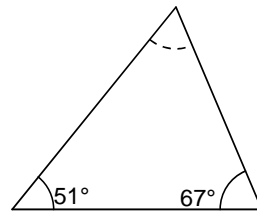
L'angle desconegut mesura  $106^\circ$

7)



L'angle desconegut mesura  $52^\circ$

8)



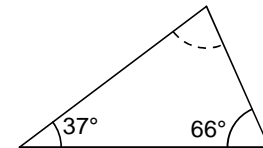
L'angle desconegut mesura  $62^\circ$

9)



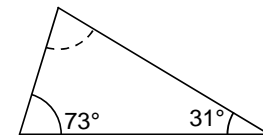
L'angle desconegut mesura  $130^\circ$

10)



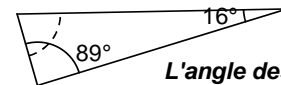
L'angle desconegut mesura  $77^\circ$

11)



L'angle desconegut mesura  $76^\circ$

12)



L'angle desconegut mesura  $75^\circ$