

PIRÀMIDES ALGEBRAIQUES

Grup Francesc



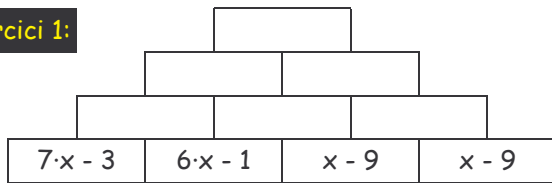
Nom i cognom:

Grup:

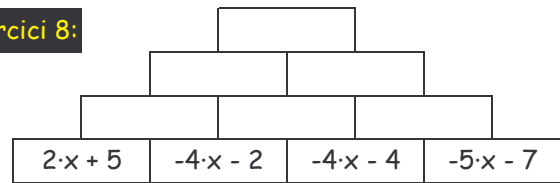
Data:

Puja a dalt de tot d'aquestes piràmides tenint en compte que a cada cel·la cal posar el resultat de la suma de les dues cel·les immediatament inferiors.

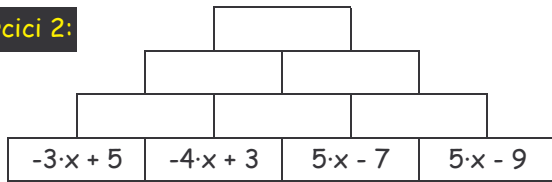
Exercici 1:



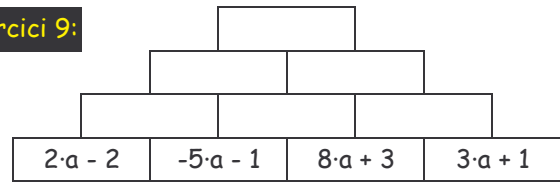
Exercici 8:



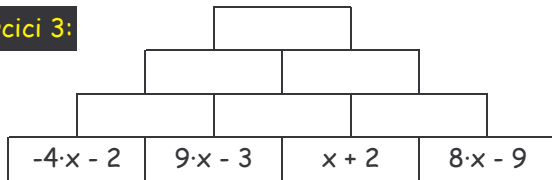
Exercici 2:



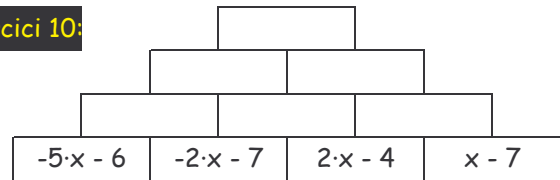
Exercici 9:



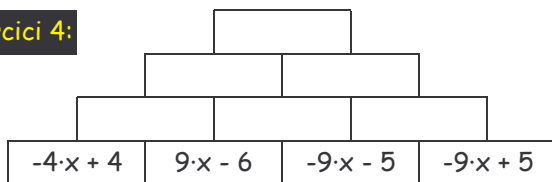
Exercici 3:



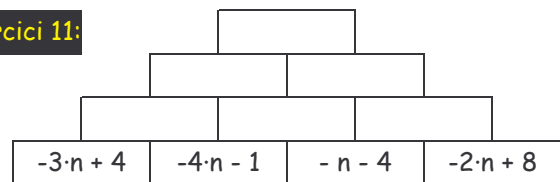
Exercici 10:



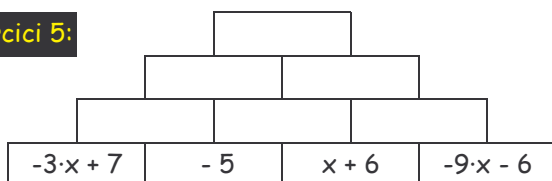
Exercici 4:



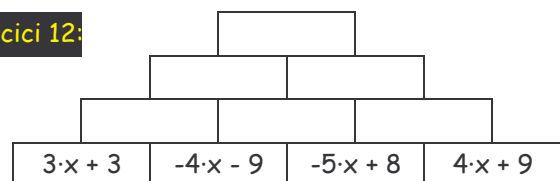
Exercici 11:



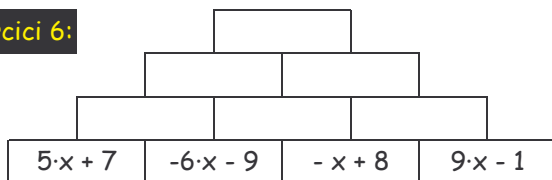
Exercici 5:



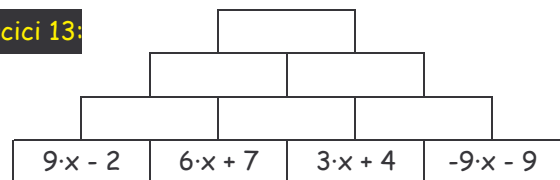
Exercici 12:



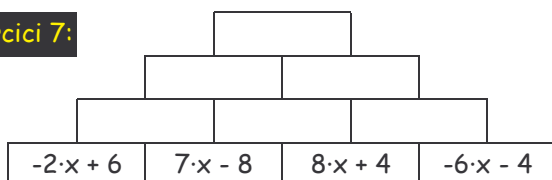
Exercici 6:



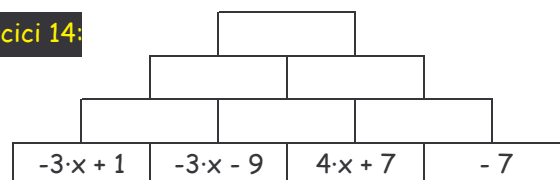
Exercici 13:



Exercici 7:



Exercici 14:



PIRÀMIDES ALGEBRAIQUES

Grup Francesc

Solucions:

1.- $29x - 42$

5.- $-9x + 4$

9.- $14a + 5$

13.- $27x + 22$

2.- $5x - 16$

6.- $-7x + 3$

10.- $-4x - 46$

14.- -12

3.- $34x - 14$

7.- $37x - 10$

11.- $-20n - 3$

4.- $-13x - 24$

8.- $-27x - 20$

12.- $-20x + 9$

